

Ordinal Numbers

Grade 2

 Name: _____ Date: _____

Section A: Write the Ordinal Number

Write the ordinal number for each counting number. **Example: 7 = 7th**

1. 3 = _____

2. 11 = _____

3. 15 = _____

4. 8 = _____

5. 20 = _____

6. 1 = _____

7. 13 = _____

8. 6 = _____

9. 18 = _____

10. 2 = _____

PracticeNLearn.com

Section B: Spell the Ordinal Number

Write the word form of these ordinal numbers. **Example: 9th = ninth**

1. 5th = _____

2. 12th = _____

3. 1st = _____

4. 16th = _____

5. 3rd = _____

6. 10th = _____

7. 19th = _____

8. 7th = _____

9. 14th = _____

10. 2nd = _____

Section C: Convert Words to Numbers

Write the ordinal number for each word. **Example: eighth = 8th**

1. fourth = _____

2. eleventh = _____

3. seventeenth = _____

4. first = _____

5. twentieth = _____

6. sixth = _____

7. thirteenth = _____

8. ninth = _____

9. fifteenth = _____

10. third = _____

Section D: Identify Position in Line

Study the line of children waiting for ice cream:

ICE CREAM TRUCK 🍦



👧 Sarah 👦 Mike 👧 Emma 👦 Ali 👧 Zara 👦 Tom 👧 Lisa 👦 Ben 👧 Nina 👦 Jack

Answer these questions:

1. Who is 1st in line? _____
2. Who is 5th in line? _____
3. What position is Tom? _____
4. What position is Ben? _____
5. Who is 3rd in line? _____
6. If Mike gets his ice cream and leaves, what position will Emma be? _____
7. Who is 10th (last) in line? _____
8. What position is Lisa? _____
9. How many children are between the 2nd and 6th person? _____
10. Who is exactly in the middle (5th or 6th)? _____

Section E: Building Floors Challenge

 STAR TOWER 

| Floor ? | Cloud Cafe ☁️

| Floor 18 | Office Space 📁

| Floor ? | Gym & Spa 🏊

| Floor 15 | Doctor's Clinic 🩺

| Floor ? | Swimming Pool 🏊

| Floor 11 | Restaurant 🍽️

| Floor ? | Game Zone 🎮

| Floor 7 | Library 📖

| Floor ? | Toy Store 🧸


| Floor 3 | Supermarket 🛒

The building has floors numbered from 1 to 20. Fill in the missing ordinal numbers:

1. Cloud Cafe is on the _____ floor (it's 2 floors above floor 18)
2. Gym & Spa is on the _____ floor (it's 1 floor below floor 18)
3. Swimming Pool is on the _____ floor (it's 2 floors above floor 11)
4. Game Zone is on the _____ floor (it's 2 floors below floor 11)
5. Toy Store is on the _____ floor (it's 2 floors above floor 3)
6. Write these floors in ordinal form:
 - Floor 3 = _____ floor
 - Floor 7 = _____ floor
 - Floor 11 = _____ floor
 - Floor 15 = _____ floor

Section F: Race Results

❑❑ SCHOOL SPORTS DAY - 100m RACE ❑❑



Finish Times:

- Maya - 15.2 seconds
- Carlos - 14.8 seconds

- Amy - 16.1 seconds
- David - 15.0 seconds
- Sophie - 14.5 seconds
- Ryan - 15.8 seconds
- Emma - 14.9 seconds
- Leo - 15.5 seconds
- Zara - 16.0 seconds
- Tom - 15.3 seconds

Based on their times (fastest = 1st), answer:

1. Who came 1st? _____
2. Who came 2nd? _____
3. Who came 3rd? _____
4. What position did Maya finish? _____
5. What position did Amy finish? _____
6. Who finished 5th? _____
7. Who finished 8th? _____
8. Who finished last (10th)? _____
9. How many runners finished between 4th and 8th position? _____
10. If Carlos was disqualified, what position would Emma move to? _____

Section G: Calendar Challenge

JANUARY						
Sun	Mon	Tue	Wed	Thu	Fri	Sat
	1	2	3	4	5	6
7	8	9	10	11	12	13
14	15	16	17	18	19	20
21	22	23	24	25	26	27
28	29	30	31			

Answer in ordinal number form:

1. What day of the month is the first Monday? _____
2. What day is the third Wednesday? _____
3. Write the ordinal form of January 15: January _____
4. What day is the second Saturday? _____
5. School starts on January 8. Write this in ordinal form: January _____
6. Your birthday is on January 19. Write: January _____
7. What day is the fourth Friday? _____
8. The last day of January is the _____ day
9. What day comes after January 11th? January _____
10. What day comes before January 20th? January _____

Section H: Pattern Completion

Complete these ordinal number patterns:

1. 1st, 2nd, 3rd, _____, 5th, _____

2. 10th, 11th, _____, 13th, _____
 3. 5th, 7th, 9th, _____, 13th, _____
 4. 20th, 18th, 16th, _____, _____
 5. 2nd, 4th, 6th, _____, _____, 12th
 6. 1st, 4th, 7th, _____, 13th, _____
 7. 15th, 14th, 13th, _____, _____
 8. 3rd, 6th, 9th, _____, 15th, _____
 9. 19th, 17th, _____, 13th, _____
 10. 8th, 10th, _____, 14th, _____
-

Section I: True or False

Write T (True) or F (False):

1. The ordinal form of 5 is 5st. _____
 2. "Twelfth" is the correct spelling for 12th. _____
 3. If you are 8th in line, there are 7 people in front of you. _____
 4. The ordinal number for 3 is 3rd. _____
 5. "Fiveteenth" is the correct spelling for 15th. _____
 6. The 10th person in line is also the last if there are 10 people. _____
 7. 1nd is the correct way to write first. _____
 8. If you live on the 13th floor, you are 13 floors above the ground floor. _____
 9. Twentieth comes after nineteenth. _____
 10. The word "second" is spelled as "secund". _____
-

Section J: Word Problems

Read carefully and answer:

1. There are 15 students in a race. Maya finishes 3rd. How many students finished before her? _____
 2. Ali lives on the 12th floor. His friend lives 5 floors above him. What floor does his friend live on? Write in ordinal form: _____
 3. Emma is reading a book. She is on the 8th page. She reads 6 more pages. What page is she on now? Write in ordinal form: _____
 4. In a line of 20 people, you are exactly in the middle. What is your position? _____
 5. Sara came 7th in a spelling bee. If 3 people ahead of her were disqualified, what position would she be now? _____
 6. A building has 18 floors. The library is on the 11th floor. How many floors are above the library? _____
 7. Tom's birthday is on the 5th of March. His sister's birthday is 8 days later. What date is his sister's birthday? March _____
 8. In a line, if you are 15th from the front and 6th from the back, how many people are in the line? _____
 9. A race has 12 runners. You finish 9th. How many people finished after you? _____
 10. If today is December 11th, what will be the date 9 days from now? Write in ordinal form: December _____
-

Section K: 🎨 Colouring Activity

Color the balloons according to the instructions:



1st



2nd



3rd



4th




5th



6th




7th



8th



9th



10th

Instructions:

1. Color the 1st balloon RED
2. Color the 3rd balloon BLUE
3. Color the 5th balloon YELLOW
4. Color the 7th balloon GREEN
5. Color the 10th balloon ORANGE

Question: Which balloons did you NOT color? Write their positions: _____, _____,

_____, _____, _____

Section L: 🎨 Drawing Activity

Draw and label:

In the space below, draw a line of 8 animals going to the zoo. Label each animal with its ordinal position (1st, 2nd, 3rd... 8th).

Drawing Space:

[Draw your 8 animals here]

Practice **N** Learn.com

After drawing, answer:

1. Which animal is 4th? _____
2. Which animal is last? _____

☀️ ANSWERS ☀️

Section A: Write the Ordinal Number

1. 3rd
2. 11th
3. 15th
4. 8th
5. 20th
6. 1st
7. 13th
8. 6th
9. 18th
10. 2nd

Section B: Spell the Ordinal Number

1. fifth
2. twelfth
3. first
4. sixteenth
5. third
6. tenth
7. nineteenth
8. seventh
9. fourteenth
10. second

Section C: Convert Words to Numbers

1. 4th

2. 11th
3. 17th
4. 1st
5. 20th
6. 6th
7. 13th
8. 9th
9. 15th
- 10.3rd

Section D: Identify Position in Line

1. Sarah
2. Zara
3. 6th
4. 8th
5. Emma
6. 2nd
7. Jack
8. 7th
9. 3 children (Mike, Emma, Ali)
- 10.Zara (5th)

Section E: Building Floors Challenge

1. 20th floor
2. 17th floor
3. 13th floor
4. 9th floor
5. 5th floor

6. 3rd floor, 7th floor, 11th floor, 15th floor

Section F: Race Results

1. Sophie (14.5s)
2. Carlos (14.8s)
3. Emma (14.9s)
4. 4th
5. 10th (last)
6. Leo (15.5s)
7. Tom (15.3s)
8. Amy (16.1s)
9. 4 runners (David, Leo, Ryan, Tom)
10. 2nd

Section G: Calendar Challenge

1. 1st (January 1st)
2. 17th (January 17th)
3. 15th
4. 13th (January 13th)
5. 8th
6. 19th
7. 26th (January 26th)
8. 31st
9. 12th
10. 19th

Section H: Pattern Completion

1. 4th, 6th
2. 12th, 14th

3. 11th
4. 14th, 12th
5. 8th, 10th
6. 10th, 16th
7. 12th, 11th
8. 12th
9. 15th
10. 12th

Section I: True or False

1. F (it's 5th)
2. T
3. T
4. T
5. F (it's fifteenth)
6. T
7. F (it's 1st)
8. T
9. T
10. F (it's second)

Section J: Word Problems

1. 2 students
2. 17th floor
3. 14th page
4. 10th or 11th position
5. 4th
6. 7 floors

- 7. 13th
- 8. 20 people
- 9. 3 people
- 10.20th

Section K: Colouring Activity

Uncolored balloons: 2nd, 4th, 6th, 8th, 9th

Section L: Drawing Activity

Answers will vary based on student's drawing. Check that:

- 8 animals are drawn
- Each is labeled correctly (1st through 8th)
- Questions answered match their drawing

PracticeNLearn.com